

הاتف/טלפון: 04-9944-531  
פקס/פקס: 04-6884-296  
almnbr@yamadares.com

مؤسسة المنبر للثقافة والعلوم  
מכון אלמנבר למדע ותרבות  
כאבול، - الجليل، ص.ب. 1296، ميكود 24963  
כאבול- הגליל, ת.ד. 1296, מיקוד 24963



اسم الطالب/ه : \_\_\_\_\_

اسم المعلم /ه : \_\_\_\_\_

بريد الكتروني للطالب : \_\_\_\_\_

بريد الكتروني للمعلم /ه: \_\_\_\_\_

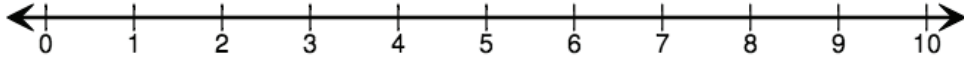
تاريخ التقديم : \_\_\_\_\_

علامه: \_\_\_\_\_

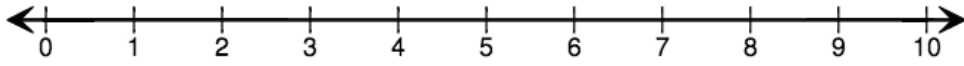
الاسم: \_\_\_\_\_

التاريخ: \_\_\_\_\_

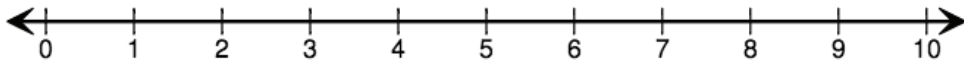
حل تمارين الطرح التالية مستعينًا بمستقيم الأعداد :



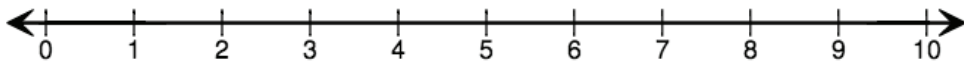
$$4 - 2 = \boxed{\phantom{00}}$$



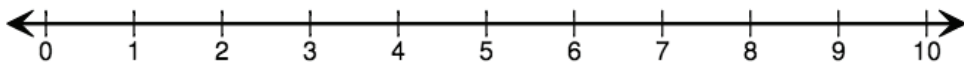
$$6 - 3 = \boxed{\phantom{00}}$$



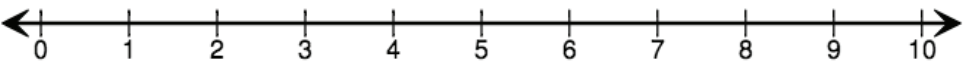
$$8 - 4 = \boxed{\phantom{00}}$$



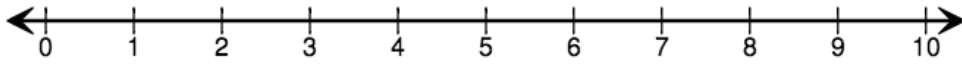
$$7 - 4 = \boxed{\phantom{00}}$$



$$8 - 3 = \boxed{\phantom{00}}$$

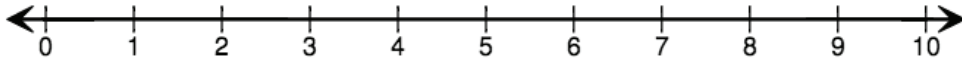


$$10 - 4 = \boxed{\phantom{00}}$$



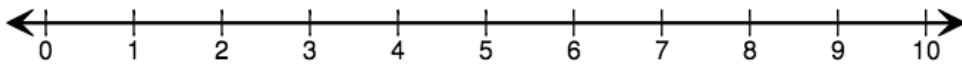
$$6 - 2 = \boxed{\phantom{00}}$$

---



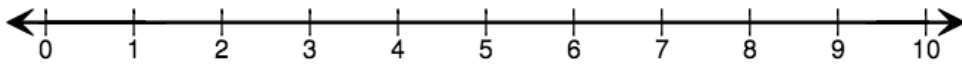
$$9 - 3 = \boxed{\phantom{00}}$$

---



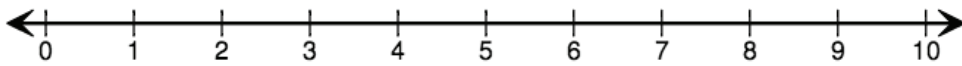
$$8 - 6 = \boxed{\phantom{00}}$$

---



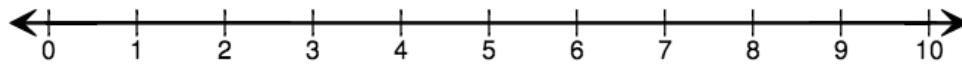
$$10 - 3 = \boxed{\phantom{00}}$$

---



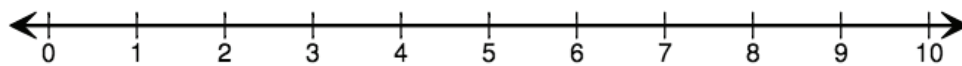
$$8 - 1 = \boxed{\phantom{00}}$$

---



$$9 - 7 = \boxed{\phantom{00}}$$

---



$$7 - 2 = \boxed{\phantom{00}}$$